




SUMMER PACKET

I'M GETTING READY FOR 2ND GRADE!

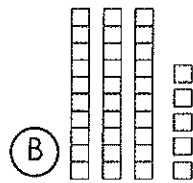
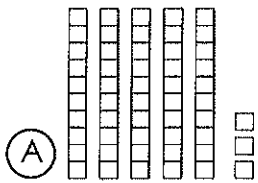


Name: _____

1 Write the missing numbers.

21 ____ 23 24 25 ____ 27

2 Which set shows 53?



3 $13 + 4 = \underline{\quad}$ $10 + 9 = \underline{\quad}$

6 Circle all the pictures that begin with *p*.



7 Mark the word that has the same beginning sound as *mouse*.

- (A) make (B) sand (C) nose

10 Rewrite the sentence with correct capitalization, spelling and punctuation.
it is time for shcool

4 Draw a line from the coin to its matching value.



• 10¢



• 1¢



• 5¢

5 If today is Wednesday, what day was it yesterday?

- (A) Tuesday (B) Thursday

8 Mark the sight word that completes the sentence.

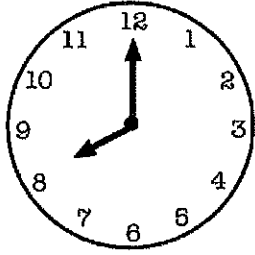
The ____ clouds are high in the sky.

- (A) funny (B) white (C) like

9 Mark the set of words that are in ABC order.

- (A) bell, farm, water, table
 (B) farm, table, water, bell
 (C) bell, farm, table, water

1 Write the time.




4 Draw a triangle.

2 8 tens, 7 ones = _____

6 tens, 2 ones = _____

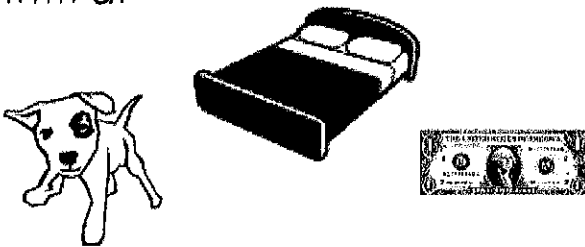
5 Which set of tally marks show 24?



3

10	8	12
- 6	- 3	- 9
_____	_____	_____

6 Circle all the pictures that begin with *d*.



8 Mark the sight word that completes the sentence.

The kids ___ new books.

(A) want (B) goes (C) went

7 Mark the word that has the same beginning sound as *chin*.

(A) change (B) patch (C) cake

9 Write the words in ABC order.

goat whale monkey bear


1. _____
2. _____
3. _____
4. _____

10 Rewrite the sentence with correct capitalization, spelling and punctuation.
when are we going to the store.

1 What comes next?




2 Write >, < or = in the circle.



3 $6 + 9 = \underline{\quad}$ $8 - 3 = \underline{\quad}$

6 Circle all the pictures that begin with *tr*.




7 Mark the word that has the same beginning sound as *lake*.

- (A) kite (B) sail (C) laugh

10 Rewrite the sentence with correct capitalization, spelling and punctuation.

Sam has soccer evry tuesday

4 Which object is the longest?



5 There are 9 boys and 7 girls in the class. How many children are there all together in the class?

- (A) $9 + 7 = 16$ children
- (B) $9 + 7 = 15$ children
- (C) $9 - 7 = 2$ children

8 Mark the sight word that completes the sentence.

___ are you reading?

- (A) Who (B) Want (C) What

9 The book is fiction.

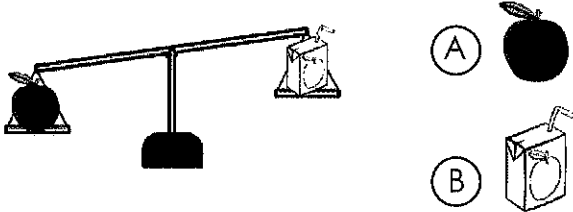


- (A) true
- (B) false

1 Find the pattern. Write the missing numbers.

6 8 10 _____ 14 _____ 18 20

2 Which object weighs less?

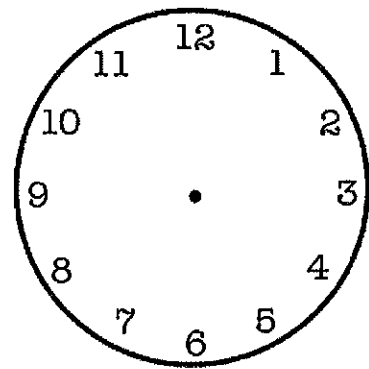


3 $9 - 2 =$ _____ $7 + 5 =$ _____

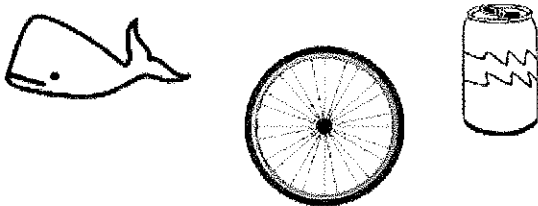
4 Write how much money in all.



5 Draw clock hands to show 3:00.



6 Circle all the pictures that begin with *wh*.



7 Mark the word that has the same beginning sound as *hop*.

- (A) pin (B) hand (C) pot

8 Mark the sight word that completes the sentence.

I watched the movie _____.

- (A) one (B) once (C) good

9 Mark the noun that completes the sentence.

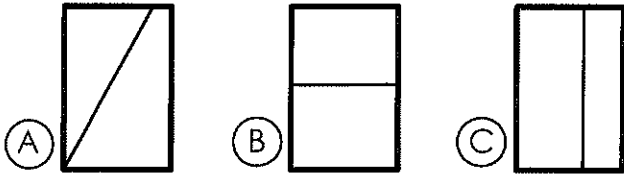
The _____ runs really fast.

- (A) house (B) pencil (C) girl

10 Rewrite the sentence with correct capitalization, spelling and punctuation.

The bus takes matt to work?

1 Which shape shows equal parts?



2 If tomorrow is Sunday, then today must be ____.

- (A) Monday (B) Saturday

3

11	15	7
+ 3	- 9	+ 8
_____	_____	_____

4 Which real-life container holds the most liquid?



5 There are 13 ducks in the pond. If 6 ducks fly away, how many ducks are left in the pond?

_____ ○ _____ = _____

_____ ducks

Read the passage. Answer the questions.

Dogs for Pets

Dogs can make good pets if you take care of them. They need food and water. They need time to play and exercise. They also need a safe and clean place to live. Taking good care of a dog will make it a happy pet.

6 What is the main idea?

- (A) Dogs like to play.
 (B) Dogs need food and water.
 (C) Dogs need a lot of care.

7 What do dogs like to do?

- (A) play
 (B) run away
 (C) help clean

8 What do dogs need to live?

- (A) toys
 (B) food and water
 (C) a bed

9 Why do you need to take good care of your dog?

- (A) The dog will be happy.
 (B) The dog will never leave you.
 (C) The dog will always be good.

10 Which word belongs in the blank?
 Dogs need ____ play.

- (A) time
 (B) go
 (C) to

- 1 Find the pattern.
Write the missing numbers.

10 15 ____ 25 ____ 35 40

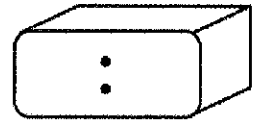
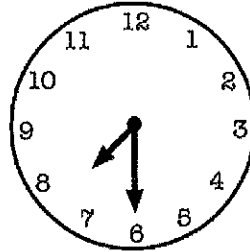
- 2 Tom has 4 shells, Angie has 7 shells and Luis has 5 shells. How many shells do they have all together?

(A) 11 shells (B) 16 shells



3

12	10	13
+ 3	+ 10	- 9
_____	_____	_____

- 4 Write the time on the digital clock that the analog clock shows.




- 5 Write the number of counters the ten-frames show.



(A) 15 (B) 17 (C) 20

- 6 Circle all the pictures that end with *g*.



- 8 Mark the sight word that completes the sentence.

Do you ____ the way home?

(A) walk (B) know (C) goes

- 7 Mark the word that has the same ending sound as *rush*.

(A) ship (B) hatch (C) dish

- 9 What does an author do?

(A) writes the words in books
(B) draws the pictures in books
(C) prints the pages in books

- 10 Rewrite the sentence with correct capitalization, spelling and punctuation.
how many cakes do you need.


1 Write how much money in all.



4 I have 4 sides. All of my sides are the same length. What shape am I?



(A)



(B)



(C)

2 Draw the tally marks to show 17.

5 What's the missing number?

$$\square + 5 = 9$$

3 $2 + 4 + 1 = \underline{\quad}$

6 Circle all the pictures that end with *n*.



7 Mark the word that has the same ending sound as *note*.

(A) pat

(B) hope

(C) nice

8 Mark the sight word that completes the sentence.

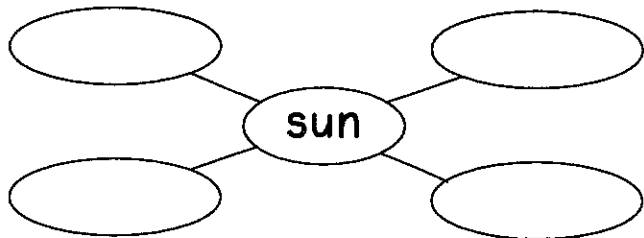
The boys are there.

(A) over

(B) even

(C) other

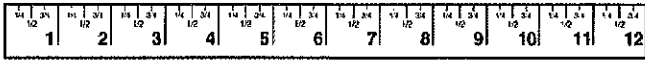
9 Write words that tell about the sun.



10 Rewrite the sentence with correct capitalization, spelling and punctuation.

I can't here you

1 How many inches long is the phone?




2 Write >, < or = in the circle.

87 ○ 78

3 $18 - 9 = \underline{\quad}$ $20 - 10 = \underline{\quad}$

6 Circle all the pictures that end with *tch*.



7 Mark the word that has the same ending sound as *pick*.


- (A) dice (B) back (C) coat

10 Rewrite the sentence with correct capitalization, spelling and punctuation.
what time is it

4 Louisa sells 8 boxes of cookies. Matt sells 5 boxes of cookies. How many boxes of cookies do they sell in all?

_____ boxes

5 Draw a line of symmetry for the shape below.



8 Mark the sight word that completes the sentence.

The dogs barking all night.

- (A) where (B) were (C) can

9 Is the sentence below fiction or non-fiction?

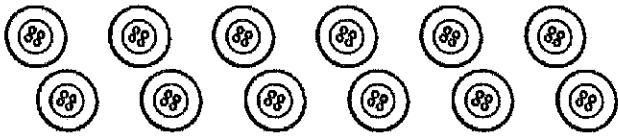
The frog hops away from the pond.

- (A) fiction (B) non-fiction

- 1 Micah goes to his piano lesson at 9:00. If his lesson is one hour long, what time will he be done?

(A) 8:00 (B) 9:30 (C) 10:00

- 2 Skip count to find how many buttons in all.




_____ buttons

- 3 $3 + 4 = \underline{\quad}$ $9 + 5 = \underline{\quad}$

- 4 Which object has the shape of a cube?



(A)



(B)

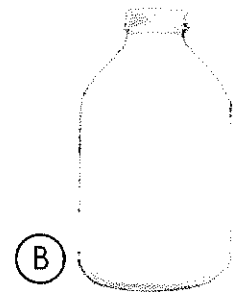


(C)

- 5 Which bottle holds the least?

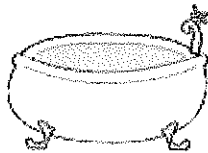


(A)



(B)

- 6 Circle all the pictures that end with *th*.



- 7 Mark the word that has the same ending sound as *happy*.

(A) play (B) boy (C) sunny

- 8 Mark the sight word that completes the sentence.

Luis _____ to the park.

(A) went (B) go (C) want

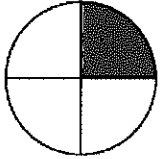
- 9 Mark the verb that completes the sentence.

The shark _____ in the ocean.

(A) walks (B) swims (C) runs

- 10 Rewrite the sentence with correct capitalization, spelling and punctuation.
my birthday is in august.

1 What is the fraction for the shaded part?



(A) $\frac{1}{3}$

(B) $\frac{1}{4}$

(C) $\frac{3}{4}$

2 Write how much money in all.



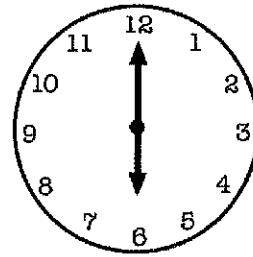
= _____

3
$$\begin{array}{r} 11 \\ - 9 \\ \hline \end{array}$$


$$\begin{array}{r} 6 \\ + 7 \\ \hline \end{array}$$

$$\begin{array}{r} 17 \\ - 6 \\ \hline \end{array}$$

4 Write the time.



5 How many marbles are there?



_____ marbles

Read the passage. Answer the questions.

Ted Bakes

Ted wants to make a cake for Mom while she is at work. He asks Dad to help. Ted and Dad wash their hands. Then they mix the cake. Last they bake the cake. Mom comes home and looks very surprised. Ted says, "We made it for you!" Ted feels great when Mom gives him a huge hug.

6 What is the setting of the story?

(A) in the morning

(B) at home

(C) at the park

7 How many characters are there?

(A) one

(B) two

(C) three

8 What do Ted and Dad do first?

(A) mix the cake

(B) bake the cake

(C) wash their hands

9 In what genre is this story?

(A) realistic fiction

(B) fantasy

(C) informational text

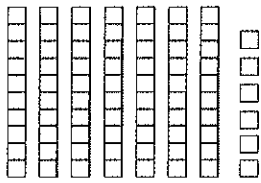
10 What will Ted, Dad and Mom do next?

(A) go to sleep

(B) play hide and seek

(C) eat the cake

1 How many blocks are there in all?

















_____ blocks

2 Which shape comes next?



3 $15 + 2 = \underline{\quad}$ $12 - 8 = \underline{\quad}$

4

Favorite Fruit						
	Apple					
	Banana					
	Orange					

Which fruit was the most popular?

How many people chose bananas?

_____ people

5 Circle the odd number.

38

25

14

Look at the homophones. Mark the word that matches the picture.

6



(A) eight

(B) ate

7



(A) son

(B) sun

8 Mark the sight word that completes the sentence.

Will you _____ sit in your chair?

(A) they

(B) pretty

(C) please

9 The person that draws the pictures in a story is called the _____.

(A) author

(B) illustrator

(C) uncle

10 Rewrite the sentence with correct capitalization, spelling and punctuation.

She can't see the board

1 Write the numbers in order from least to greatest.




2 Luke has 3 pens. He buys 7 more. How many pens does he have now?


_____ pens

3	4	9	7
	+ 4	+ 9	+ 7
<hr/>			

4 Leah reads eight books. Allen reads nine books. Draw the number of books each person reads.



Leah



Allen


Who reads fewer books? _____

5 Find the pattern. Write the missing numbers.

10 20 ___ 40 ___ 60 70

Look at the homophones. Mark the word that matches the picture.

6



- (A) male
- (B) mail

7




- (A) I
- (B) eye

8 Mark the sight word that completes the sentence.

___ child in our class gets to play.

- (A) Every
- (B) Ever
- (C) Even

9 The book is fiction.

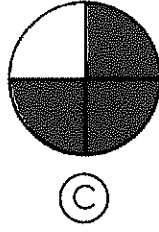
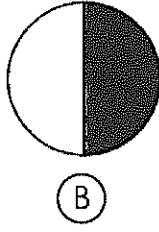
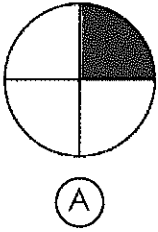


- (A) true
- (B) false

10 Rewrite the sentence with correct capitalization, spelling and punctuation.

Emily play outside?

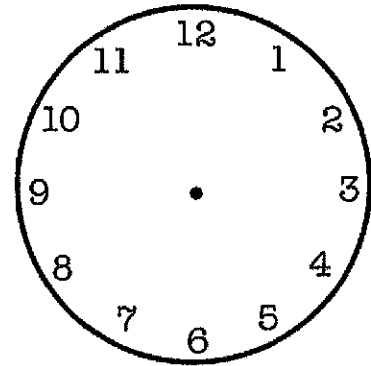
1 Which shape shows one half?



2 Asha has 2 dimes, 3 nickels and 1 penny. How much money does she have in all?

3	10	9	16
	- 5	- 9	- 8
	_____	_____	_____

4 Draw the clock hands to show 1:30.




5 Write the number for each number word.

eighteen: _____ thirty: _____

twenty-two: _____ fifty-one: _____

Look at the homophones. Mark the word that matches the picture.



- (A) meet
- (B) meat



- (A) deer
- (B) dear

8 Mark the sight word that completes the sentence.

Kenny is _____ Minnesota.

- (A) four
- (B) go
- (C) from

9 Write the words in ABC order.

pear berry grape orange

1. _____
2. _____
3. _____
4. _____

10 Rewrite the sentence with correct capitalization, spelling and punctuation.
watch out four the car!

1 What's the missing number?

+ 6 = 12

2 My number is between 16 and 20.
My number is even. What number
am I?

3 $5 + 2 + 8 =$ _____

4 Write the number of tally marks.




_____ tally marks

5 Draw a shape with zero sides.

Look at the homophones. Mark the
word that matches the picture.

6



- (A) right
- (B) write

7



- (A) would
- (B) wood

8 Mark the sight word that completes
the sentence.

We can't _____ the music.

- (A) here
- (B) her
- (C) hear

9 Mark the verb that completes the
sentence.

The kite _____ high in the sky.


- (A) flies
- (B) blue
- (C) little

10 Rewrite the sentence with correct capitalization, spelling and punctuation.
do you want to play.

1 Write >, < or = in the circle.

$3 + 5$ ○ $5 + 3$

2 Write the number of flat surfaces on a cylinder.



_____ flat surfaces

3 $11 - 7 =$ _____ $9 + 8 =$ _____

4 Write how much money in all.



5 Write a story problem for $7 - 5 = 2$.

Read the passage. Answer the questions.

There are many kinds of farms. Some farms have cows. Many people drink the milk that cows make. Corn also comes from farms. Farmers plant the corn. Then they water the corn until it grows tall. Trucks take the milk and the corn to the stores.

6 What would be a good title?

- (A) Corn
- (B) Farms
- (C) Milk

7 Why do farms produce milk?

- (A) for people to drink
- (B) for fun
- (C) to give away for free

8 How does corn get to the stores?

- (A) farmers bring it
- (B) by truck
- (C) by airplane

9 What does the farmer have to do next after planting the corn?

- (A) nothing
- (B) bring it to the store
- (C) water it

10 What is the main idea?

- (A) Farmers are hard workers.
- (B) There are many kinds of farms.
- (C) Milk and corn go to the stores.

1 Which set repeats the pattern?



2 Equal means the ____.

- (A) most (B) least (C) same

3 $11 + 3 = \underline{\quad}$ $10 - 7 = \underline{\quad}$

4 About how long is this crayon?



(A) 3 inches

(B) 3 feet

5 What's the missing number?

- 4 = 6

Name each picture. Then write the compound word the two words make together.



_____ + _____ = _____



_____ + _____ = _____

8 Mark the sight word that completes the sentence.

You need to drink ____ water.

- (A) same (B) some (C) for

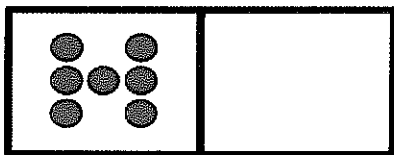
9 Mark the correctly spelled word to complete the sentence.

How ____ boys are in your class?

- (A) many (B) meny (C) mony

10 Rewrite the sentence with correct capitalization, spelling and punctuation.
do yor Homework every night.

1 Draw the missing part of 10. Write the missing numbers.



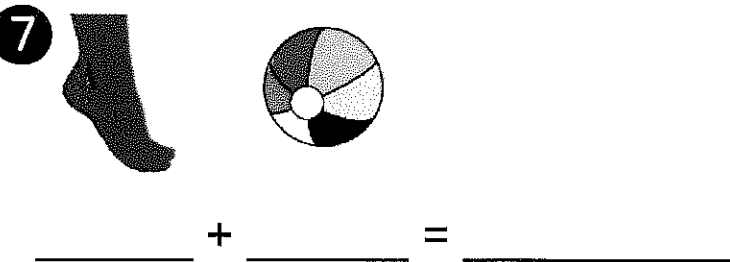

_____ _____
part I know missing part

2 Write 10 more than 56: _____

3


19	8	14
- 1	+ 7	+ 3
_____	_____	_____

Name each picture. Then write the compound word the two words make together.



10 Rewrite the sentence with correct capitalization, spelling and punctuation.
is it raining outside

4 How many counters are there?



(A) 29

(B) 54

(C) 60

5 Write how much money in all.



8 Mark the sight word that completes the sentence.

It _____ started raining.

(A) just

(B) have

(C) will

9 Read the list of words. Find the group where the list of words belongs.

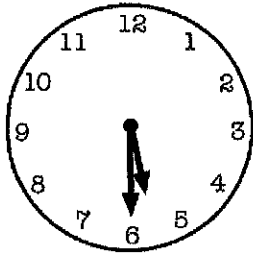
pizza, apple, carrot, bread

(A) fruit

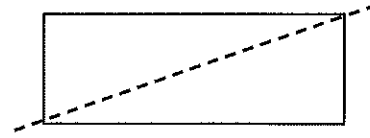
(B) plants

(C) food

1 Write the time.



4 The shape below shows a line of symmetry.



(A) True

(B) False


2 Julian sees 23 birds. Calla sees 32 birds. Who sees more birds?

5 Lisa has 7 stickers, Tyrone has 4 stickers and Kayla 5 stickers. How many stickers do they have in all?

_____ stickers

$\begin{array}{r} 20 \\ - 0 \\ \hline \end{array}$	$\begin{array}{r} 12 \\ - 2 \\ \hline \end{array}$	$\begin{array}{r} 9 \\ + 7 \\ \hline \end{array}$
--	--	---

Name each picture. Then write the compound word the two words make together.



_____ + _____ = _____

8 Mark the sight word that completes the sentence.

Remember to _____ the umbrella.

(A) talk

(B) take

(C) ride

9 Read the first part of the sentence. Mark the part that completes the sentence.

Let's go for _____.

(A) bike ride home.

(B) a walk in the park.



_____ + _____ = _____

10 Rewrite the sentence with correct capitalization, spelling and punctuation.

She doesn't know how to play

1 Find the pattern. Write the missing numbers.

10 20 _____ 40 _____ 60 70

2 What's the name of the shape?



- (A) rectangular prism
- (B) cube
- (C) cylinder


3 $8 + 3 =$ _____ $9 - 7 =$ _____

4 Write how much money in all.



5 Write an odd number less than 10.

Name each picture. Then write the compound word the two words make together.



_____ + _____ = _____



_____ + _____ = _____

8 Mark the sight word that completes the sentence.

Pete is _____ new cat.

- (A) our
- (B) hour
- (C) are

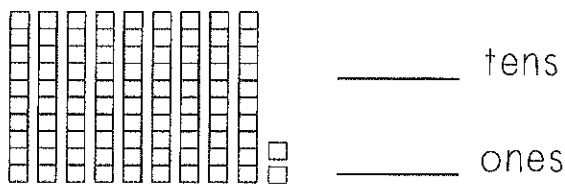
9 Mark the noun in the sentence.

The fish is swimming.

- (A) The
- (B) fish
- (C) swimming

10 Rewrite the sentence with correct capitalization, spelling and punctuation.
eat all of your Carrots.

- 1 Write the number of blocks as tens and ones.



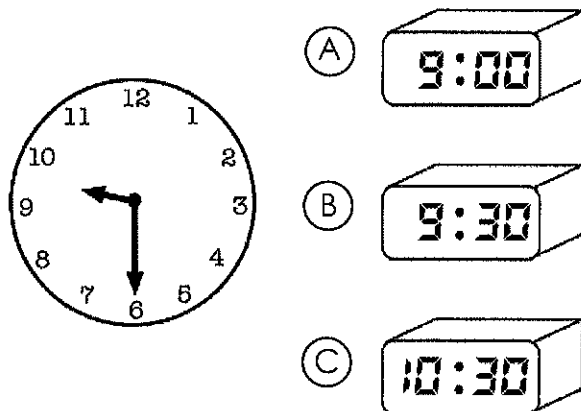
- 2 Circle the smallest number.

87 46 78

3

$\begin{array}{r} 13 \\ + 3 \\ \hline \end{array}$	$\begin{array}{r} 11 \\ - 4 \\ \hline \end{array}$	$\begin{array}{r} 8 \\ + 6 \\ \hline \end{array}$
--	--	---

- 4 Which clock shows the same time?



- 5 Adam has 12 pennies. He loses 5 of his pennies. How many pennies does he have now?

_____ pennies

Read the passage. Answer the questions.

Annie's room was a disaster. There were toys on the floor, books on the bed and clothes on the desk. Her mom said, "Your room is a mess! You have to clean it now or you won't get to play." Annie spent two hours picking up her toys, books and clothes and putting them away. When Annie's mom came back, she smiled and said, "Your room looks much better!"

- 6 Who is the main character?

- (A) Annie
- (B) Mom
- (C) the bedroom

- 7 What is the setting?

- (A) the kitchen
- (B) at school
- (C) Annie's bedroom

- 8 What is Annie's problem?

- (A) Annie has a lot of homework.
- (B) Annie's room is too messy.
- (C) Annie's mom is too busy.

- 9 How does Annie fix the problem?

- (A) Annie's friend helps her.
- (B) Annie's mom cleans her room.
- (C) Annie puts her stuff away.

- 10 What is this story mostly about?

- (A) Annie cleans her room.
- (B) Annie puts her clothes away.
- (C) Annie's mom is mad.